
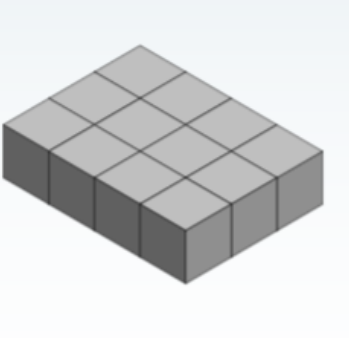

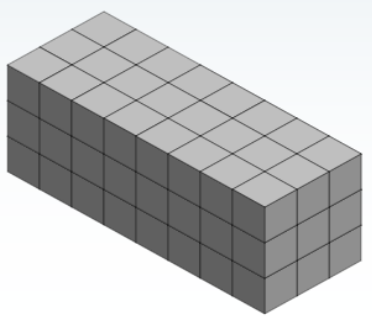

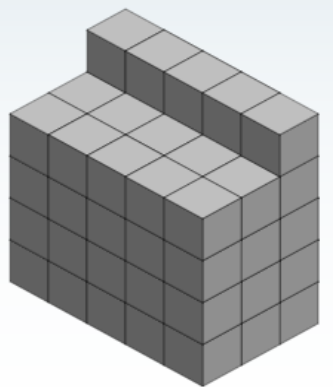
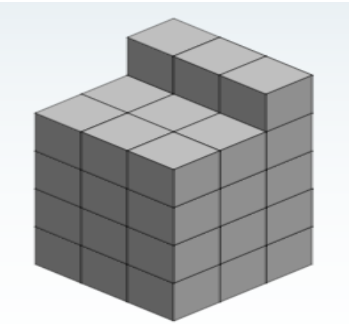
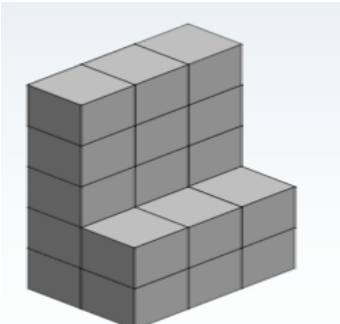
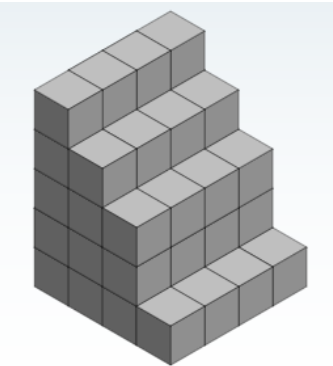


MATHS WORKSHEETS- VOLUME- FINDING THE VOLUME BY COUNTING CUBES

Find the volume of these shapes by counting the cubes. (Each cube is 1 cm³).

<p>1.</p>  <p>Volume:</p>	<p>2.</p>  <p>Volume:</p>	<p>3.</p>  <p>Volume:</p>
<p>4.</p>  <p>Volume:</p>	<p>5.</p>  <p>Volume:</p>	<p>6.</p>  <p>Volume:</p>
<p>7.</p>  <p>Volume:</p>	<p>8.</p>  <p>Volume:</p>	<p>9.</p>  <p>Volume:</p>

MATHS WORKSHEETS- VOLUME- FINDING THE VOLUME BY
COUNTING CUBES

Answer Key:

1. 36 cm^3
2. 12 cm^3
3. 27 cm^3
4. 72 cm^3
5. 80 cm^3
6. 65 cm^3
7. 39 cm^3
8. 21 cm^3
9. 52 cm^3