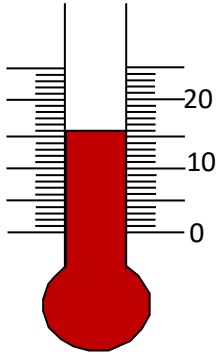


MATHS WORKSHEETS- TEMPERATURE – MEASURING TEMPERATURES

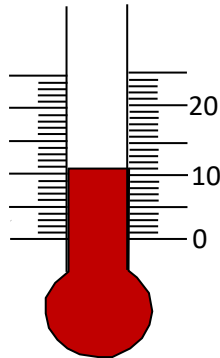
Write the temperature shown on each thermometer (in °C).

1.



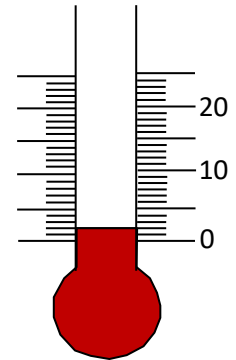
Answer:

2.



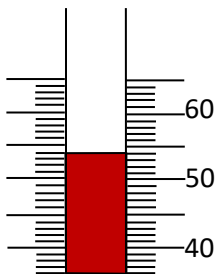
Answer:

3.



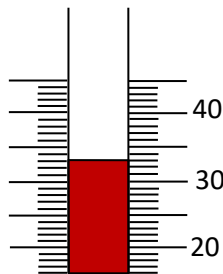
Answer:

4.



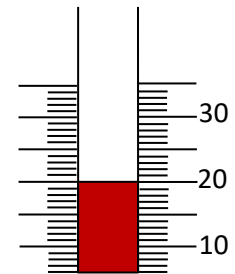
Answer:

5.



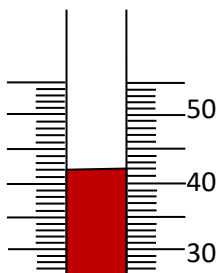
Answer:

6.



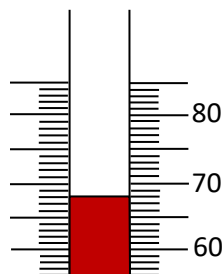
Answer:

7.



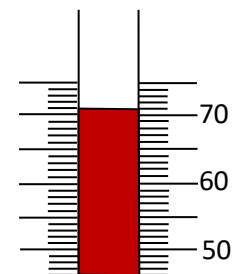
Answer:

8.



Answer:

9.



Answer:

Answer Key:

1. 16°C
2. 11°C
3. 2°C
4. 54°C
5. 33°C
6. 20°C
7. 42°C
8. 68°C
9. 71°C