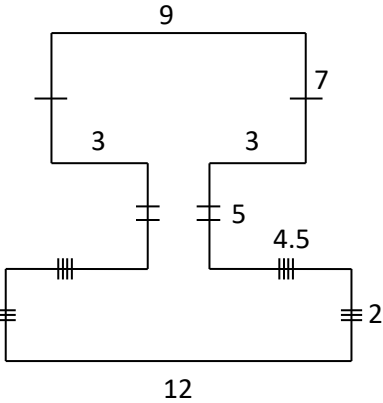
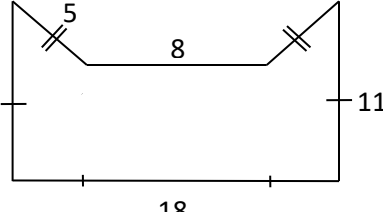
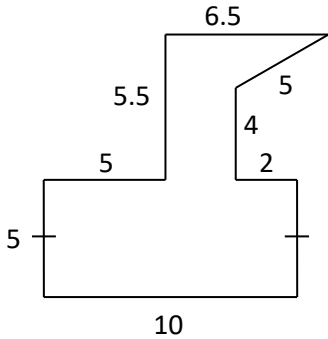
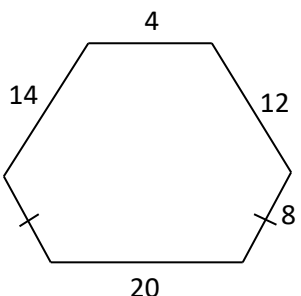
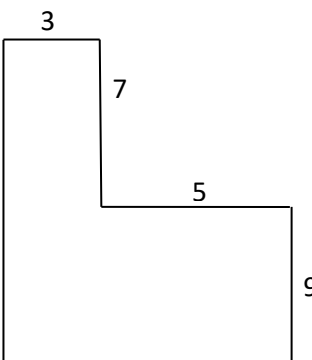
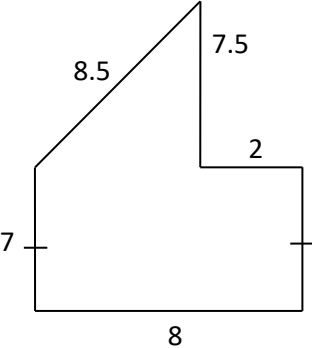
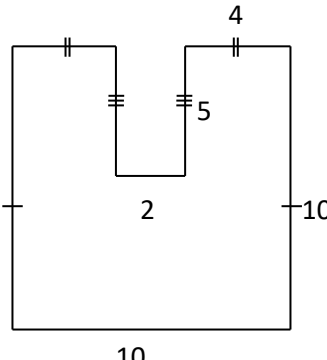
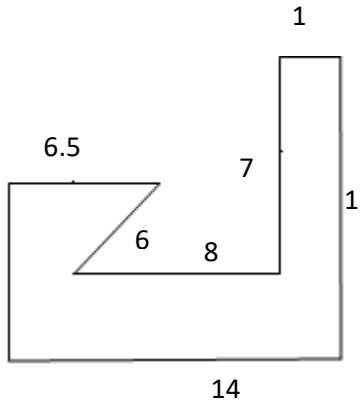
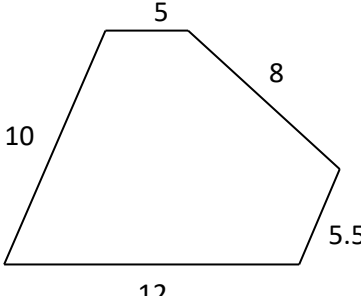


MATHS WORKSHEETS- PERIMETERS OF IRREGULAR SHAPES

Find the perimeter of the following shapes. The measurements are given in centimeters.

5.5

<p>1.</p>  <p>Answer:</p>	<p>2.</p>  <p>Answer:</p>	<p>3.</p>  <p>Answer:</p>
<p>4.</p>  <p>Answer:</p>	<p>5.</p>  <p>Answer:</p>	<p>6.</p>  <p>Answer:</p>
<p>7.</p>  <p>Answer:</p>	<p>8.</p>  <p>Answer:</p>	<p>9.</p>  <p>Answer:</p>

Answer Key:

Add all sides to get the Perimeter

1. 64 cm
2. 58 cm
3. 48 cm
4. 66 cm
5. 48 cm
6. 40 cm
7. 50 cm
8. 62.5 cm
9. 40.5 cm