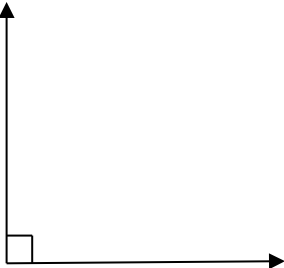
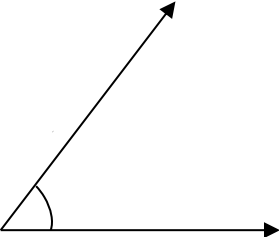
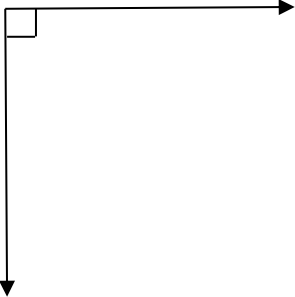
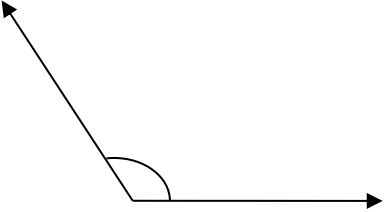
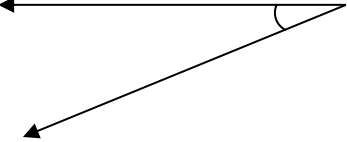

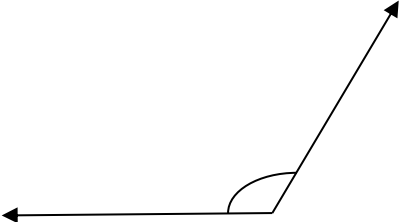
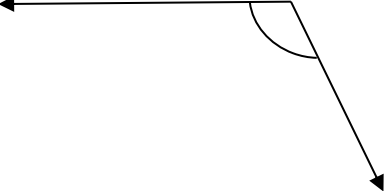



## MATHS WORKSHEETS- GEOMETRY- TYPES OF ANGLES

Label each angle as acute, obtuse, right or straight angle.

<p>1.</p>  <p>Answer:</p>	<p>2.</p>  <p>Answer:</p>	<p>3.</p>  <p>Answer:</p>
<p>4.</p>  <p>Answer:</p>	<p>5.</p>  <p>Answer:</p>	<p>6.</p>  <p>Answer:</p>
<p>7.</p>  <p>Answer:</p>	<p>8.</p>  <p>Answer:</p>	<p>9.</p>  <p>Answer:</p>

### Answer Key:

- Hint: 1) Acute angle: less than  $90^\circ$   
2) Right angle:  $90^\circ$   
3) Obtuse angle: more than  $90^\circ$  & less than  $180^\circ$   
4) Straight angle:  $180^\circ$   
5) Reflex angle: more than  $180^\circ$  & less than  $360^\circ$   
6) Full rotation:  $360^\circ$

1. Right angle
2. Acute angle
3. Right angle
4. Obtuse angle
5. Acute angle
6. Straight angle
7. Obtuse angle
8. Obtuse angle
9. Straight angle