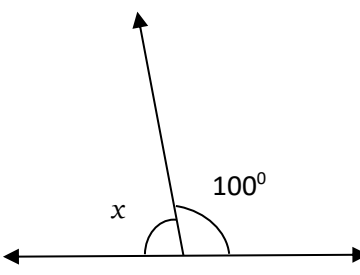
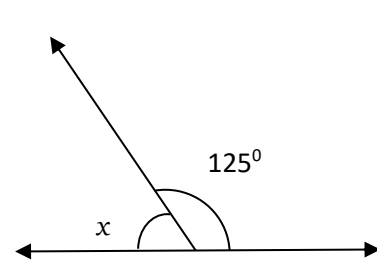
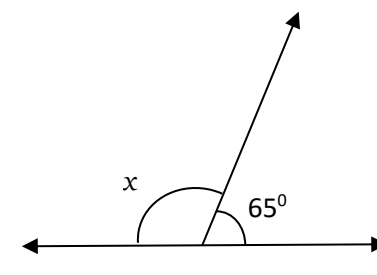
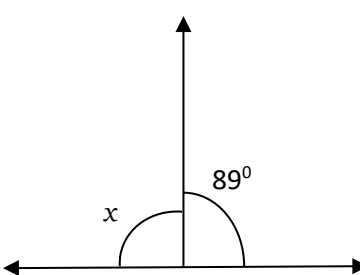
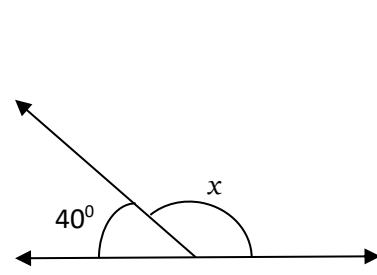
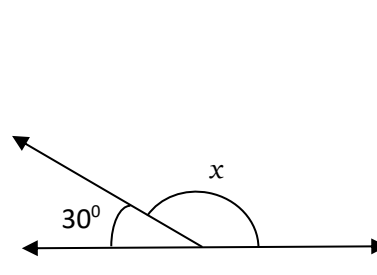
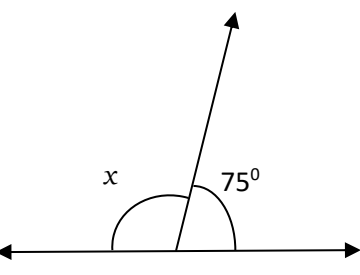
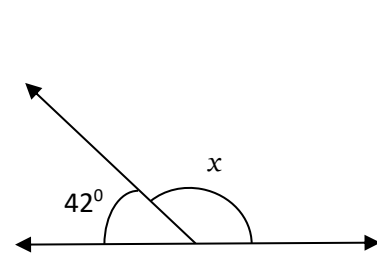
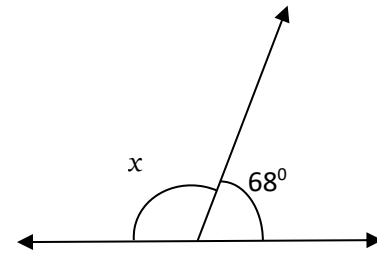


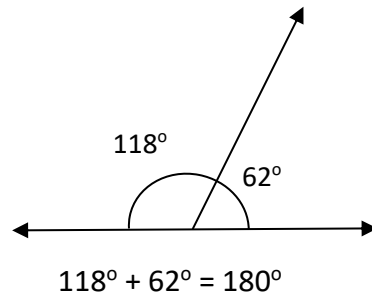
## MATHS WORKSHEETS- GEOMETRY- SUPPLEMENTARY ANGLES

Find the missing angle measurement in each set of supplementary angles.

<p>1.</p>  <p>Answer:</p>	<p>2.</p>  <p>Answer:</p>	<p>3.</p>  <p>Answer:</p>
<p>4.</p>  <p>Answer:</p>	<p>5.</p>  <p>Answer:</p>	<p>6.</p>  <p>Answer:</p>
<p>7.</p>  <p>Answer:</p>	<p>8.</p>  <p>Answer:</p>	<p>9.</p>  <p>Answer:</p>

### Answer Key:

When the sum of two angles is  $180^\circ$ , then the angles are known as supplementary angles.



1.  $180^\circ$
2.  $55^\circ$
3.  $115^\circ$
4.  $91^\circ$
5.  $140^\circ$
6.  $150^\circ$
7.  $105^\circ$
8.  $138^\circ$
9.  $112^\circ$