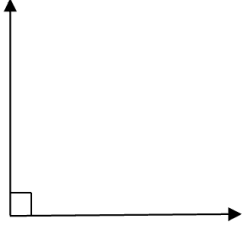
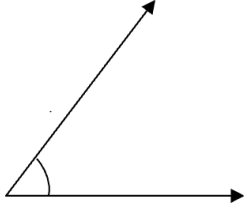
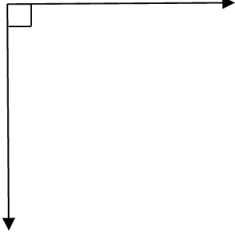
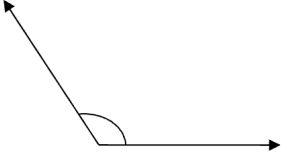
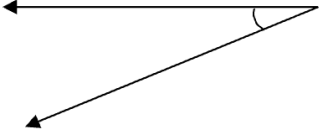
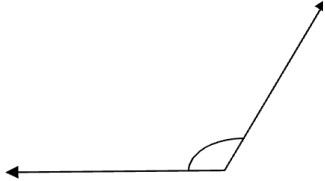
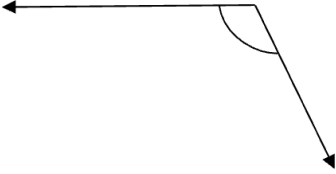
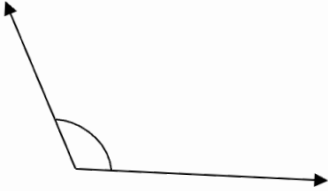
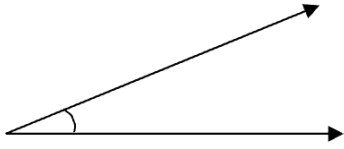


Brilliance Tuition Centre, Redbank Plains

MATHS WORKSHEETS- GEOMETRY- SMALLER THAN OR BIGGER THAN A RIGHT ANGLE

State whether each of the following angle is smaller than, bigger than or equal to a right angle.

<p>1)</p>  <p>Answer:</p>	<p>2)</p>  <p>Answer:</p>	<p>3)</p>  <p>Answer:</p>
<p>4)</p>  <p>Answer:</p>	<p>5)</p>  <p>Answer:</p>	<p>6)</p>  <p>Answer:</p>
<p>7)</p>  <p>Answer:</p>	<p>8)</p>  <p>Answer:</p>	<p>9)</p>  <p>Answer:</p>

MATHS WORKSHEETS- GEOMETRY- SMALLER THAN OR BIGGER THAN A RIGHT ANGLE

Answer Key:

- 1) equal to
- 2) smaller than
- 3) equal to
- 4) bigger than
- 5) smaller than
- 6) bigger than
- 7) bigger than
- 8) bigger than
- 9) smaller than