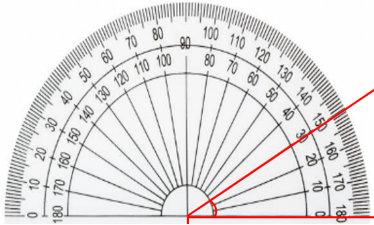


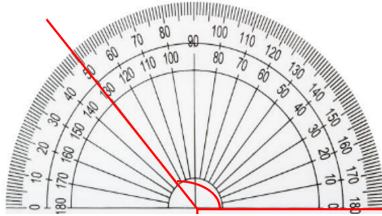
Write the size of each angle.

1)



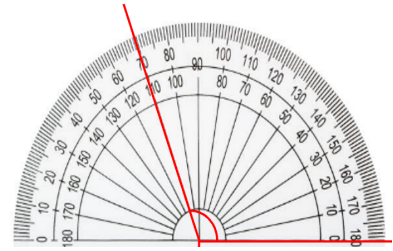
Answer:

2)



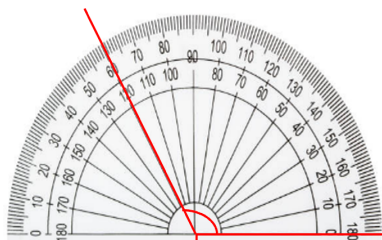
Answer:

3)



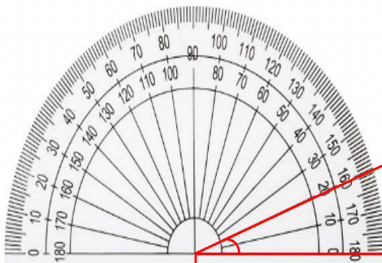
Answer:

4)



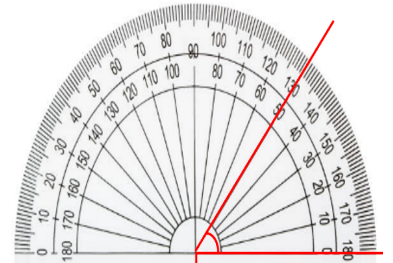
Answer:

5)



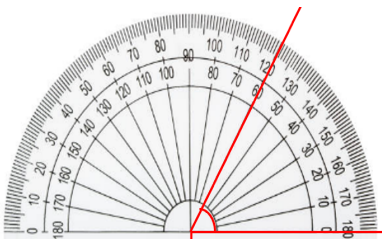
Answer:

6)



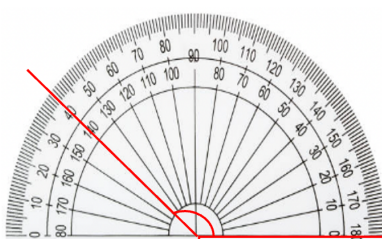
Answer:

7)



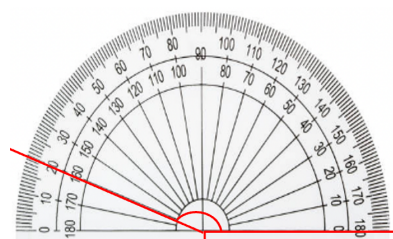
Answer:

8)



Answer:

9)



Answer:

### Answer Key:

1.  $30^{\circ}$
2.  $130^{\circ}$
3.  $110^{\circ}$
4.  $120^{\circ}$
5.  $20^{\circ}$
6.  $50^{\circ}$
7.  $60^{\circ}$
8.  $140^{\circ}$
9.  $160^{\circ}$