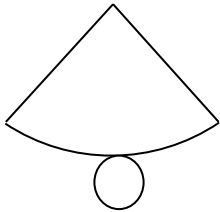


MATHS WORKSHEETS- GEOMETRY- NAMING SHAPES FROM NET


Name the shape formed by each net.

1.



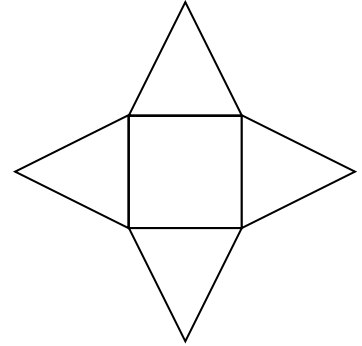
Answer:

2.



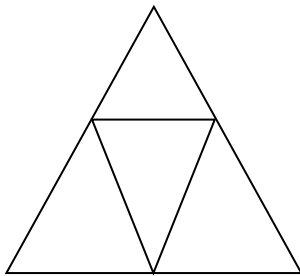
Answer:

3.



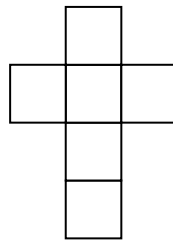
Answer:

4.



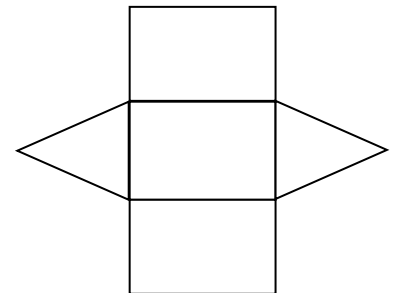
Answer:

5.



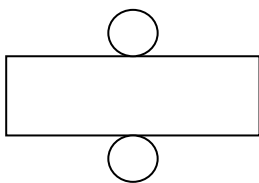
Answer:

6.




Answer:

7.




Answer:

8.



Answer:

9.



Answer:

Answer Key:

1. Cone
2. Cuboid
3. Square based pyramid
4. Tetrahedron/Triangular pyramid
5. Cube
6. Triangular prism
7. Cylinder
8. Pentagonal pyramid
9. Hexagonal pyramid