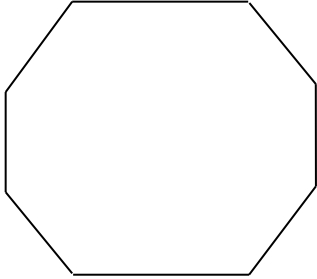



Write the name of the following shapes.

1.



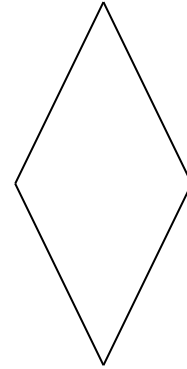
Answer:

2.



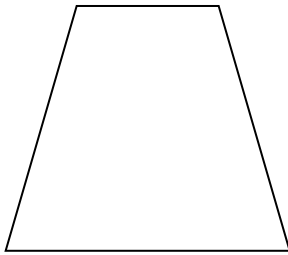
Answer:

3.




Answer:

4.



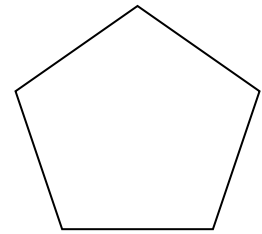
Answer:

5.




Answer:

6.



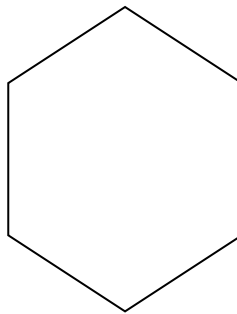
Answer:

7.




Answer:

8.



Answer:


9.





Answer:


Answer Key:


- Polygons are named after the number of sides they have.

Triangle 3 sides 

Quadrilateral 4 sides 

Pentagon 5 sides 


Hexagon 6 sides 

Octagon 8 sides 

- Quadrilaterals have 4 sides. They have different shapes.

Rectangle 

Trapezoid 

Parallelogram 

Square 

Rhombus 

Answers:

- 1) Octagon
- 2) Square
- 3) Rhombus
- 4) Trapezoid
- 5) Parallelogram
- 6) Pentagon
- 7) Triangle
- 8) Hexagon
- 9) Rectangle