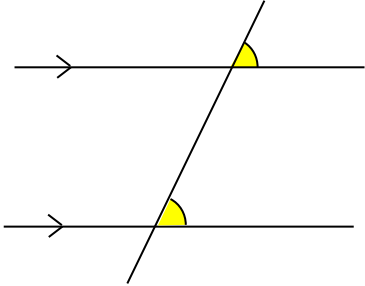


MATHS WORKSHEETS- GEOMETRY- NAME THE ANGLES FORMED BETWEEN TWO PARALLEL LINES AND TRANSVERSAL

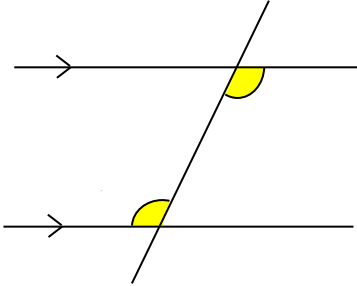
Name the following angles.

1.



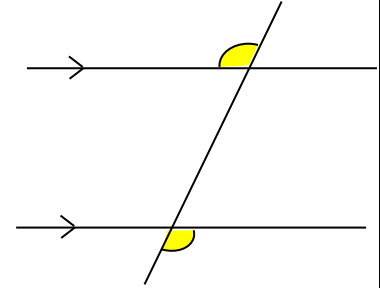
Answer:

2.



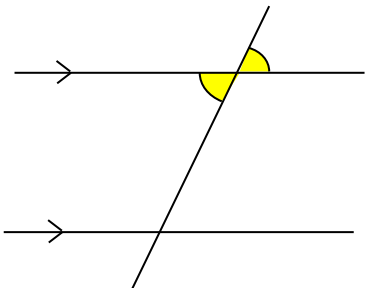
Answer:

3.



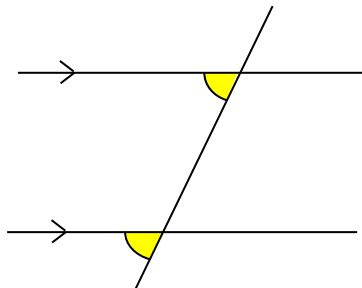
Answer:

4.



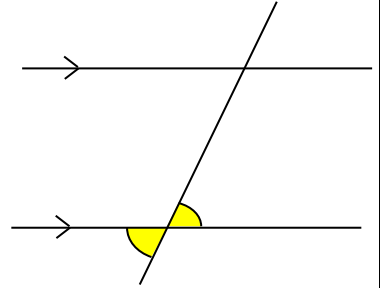
Answer:

5.



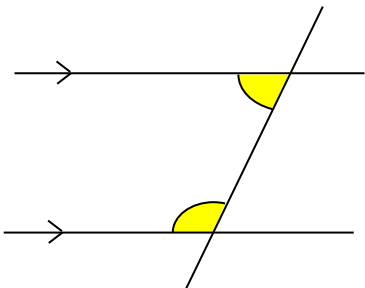
Answer:

6.



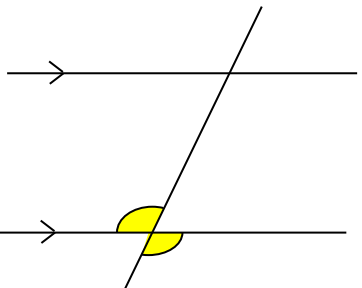
Answer:

7.



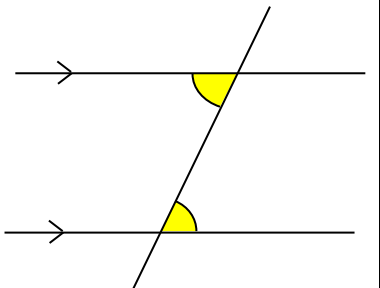
Answer:

8.



Answer:

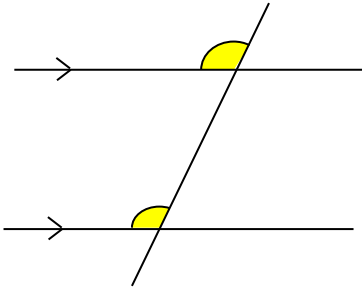
9.



Answer:

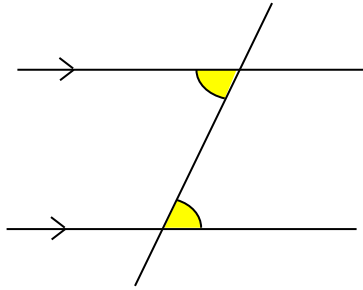
MATHS WORKSHEETS- GEOMETRY- NAME THE ANGLES FORMED BETWEEN TWO PARALLEL LINES AND TRANSVERSAL

10.



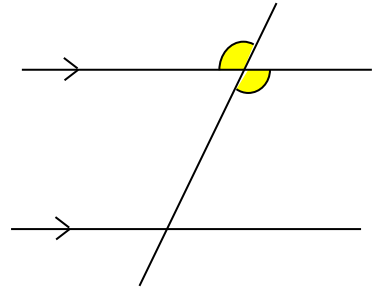
Answer:

11.



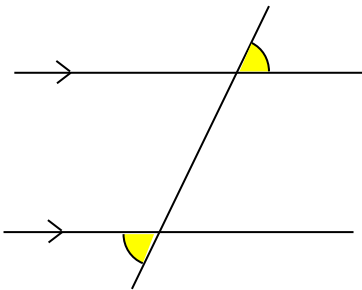
Answer:

12.



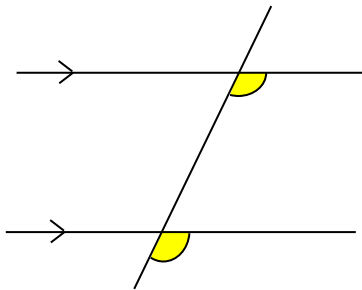
Answer:

13.



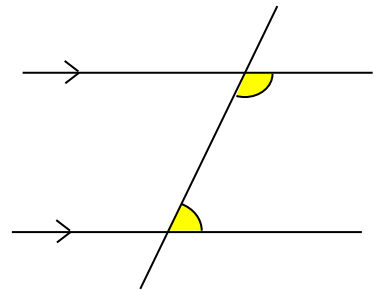
Answer:

14.



Answer:

15.



Answer:

MATHS WORKSHEETS- GEOMETRY- NAME THE ANGLES FORMED BETWEEN TWO PARALLEL LINES AND TRANSVERSAL

Answer Key:

1. Corresponding angles
2. Alternate interior angles
3. Alternate exterior angles
4. Vertically opposite angles
5. Corresponding angles
6. Vertically opposite angles
7. Co-interior angles
8. Vertically opposite angles
9. Alternate interior angles
10. Corresponding angles
11. Alternate interior angles
12. Vertically opposite angles
13. Alternate exterior angles
14. Corresponding angles
15. Co interior angles