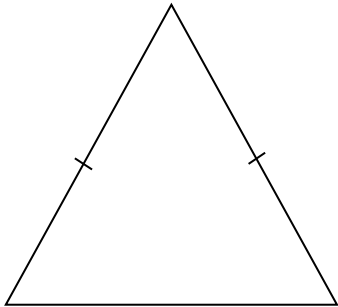


MATHS WORKSHEETS- IDENTIFYING TRIANGLES BASED ON THE LENGTH OF THEIR SIDES

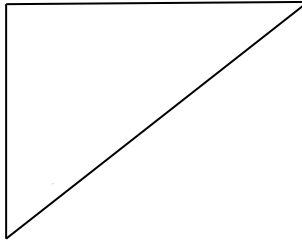
Identify each triangle based on the length of their sides.

1.



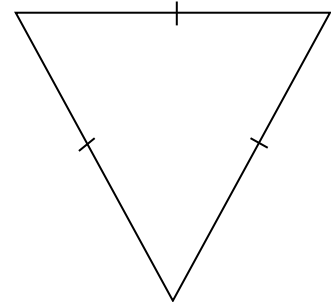
Answer:

2.



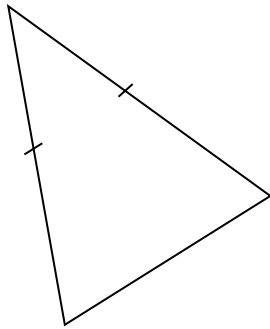
Answer:

3.



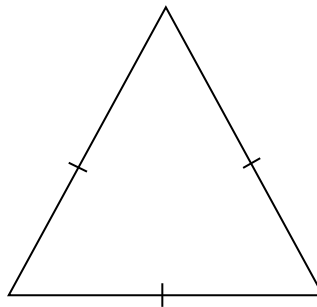
Answer:

4.



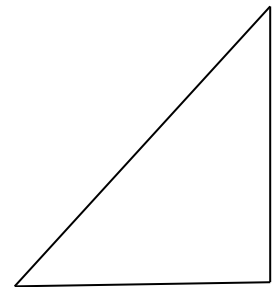
Answer:

5.



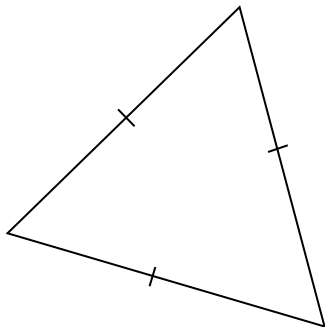
Answer:

6.



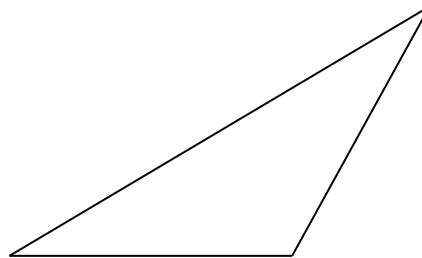
Answer:

7.



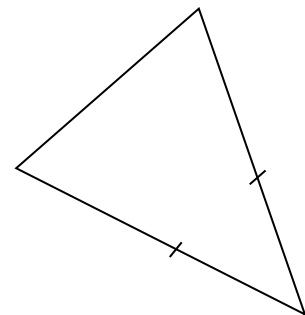
Answer:

8.



Answer:

9.



Answer:

MATHS WORKSHEETS- IDENTIFYING TRIANGLES BASED ON THE LENGTH OF THEIR SIDES

Answer Key:

Hint:

1. Scalene triangle: Three sides have different side measures
2. Isosceles triangle: Two sides have equal length
3. Equilateral triangle: All three sides are equal in length

1. Isosceles triangle
2. Scalene triangle
3. Equilateral triangle
4. Isosceles triangle
5. Equilateral triangle
6. Scalene triangle
7. Equilateral triangle
8. Scalene triangle
9. Isosceles triangle