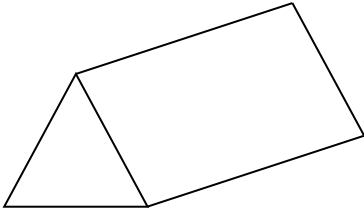


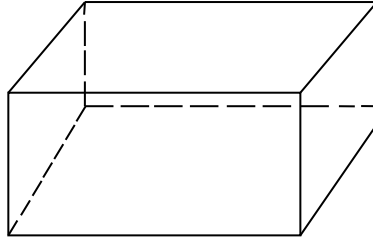
Identify the following shapes.

1.



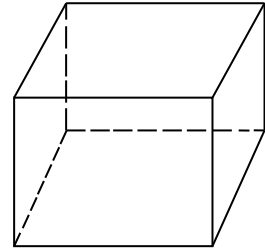
Answer:

2.



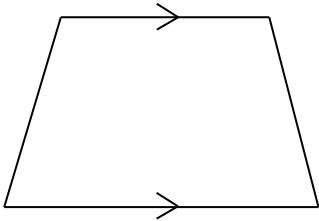
Answer:

3.



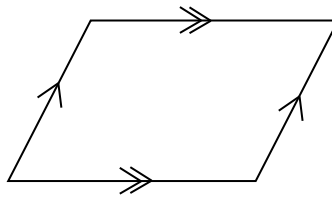
Answer:

4.



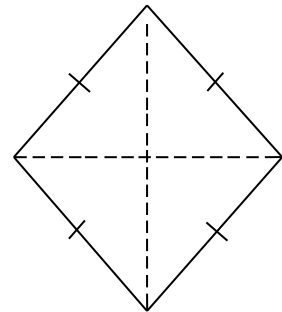
Answer:

5.



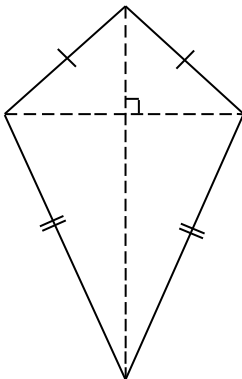
Answer:

6.



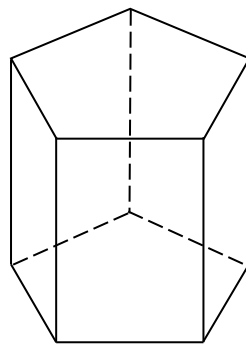
Answer:

7.



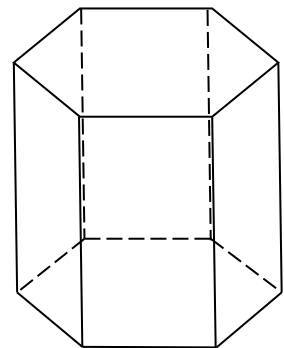
Answer:

8.



Answer:

9.



Answer:

### Answer Key:

1. Triangular Prism
2. Rectangular Prism (or) Cuboid
3. Cube
4. Trapezium
5. Parallelogram
6. Rhombus
7. Kite
8. Pentagonal Prism
9. Hexagonal Prism