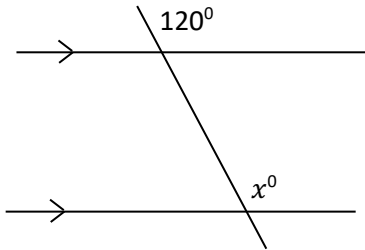


MATHS WORKSHEETS- GEOMETRY- CORRESPONDING ANGLES

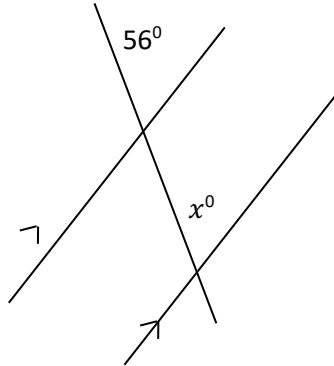
Find the value of the pronumeral.

1.



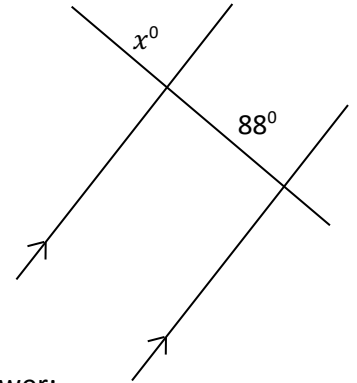
Answer:

2.



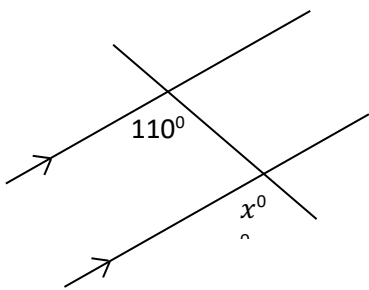
Answer:

3.



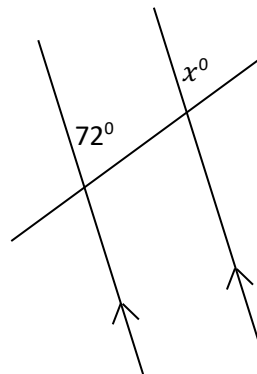
Answer:

4.



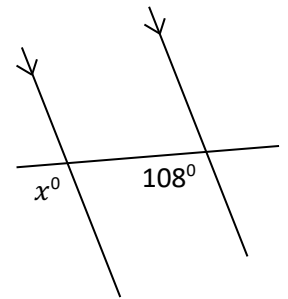
Answer:

5.



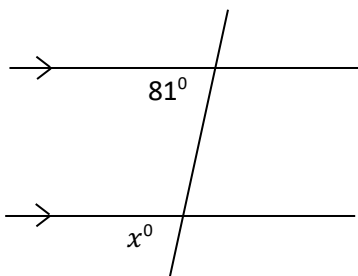
Answer:

6.



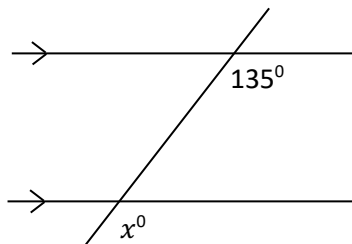
Answer:

7.



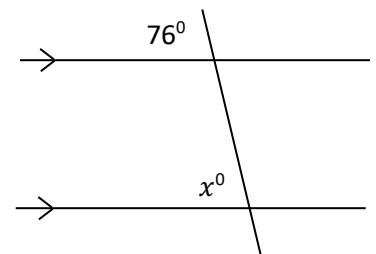
Answer:

8.



Answer:

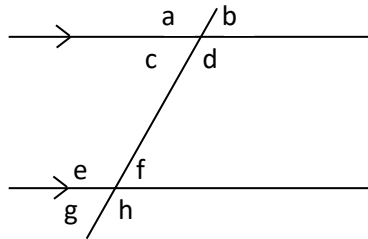
9.



Answer:

Answer Key:

Corresponding angles are equal.



Corresponding angles:

$$a=e$$

$$d=h$$

$$b=f$$

$$c=g$$

1. 120°
2. 56°
3. 88°
4. 110°
5. 72°
6. 108°
7. 81°
8. 135°
9. 76°