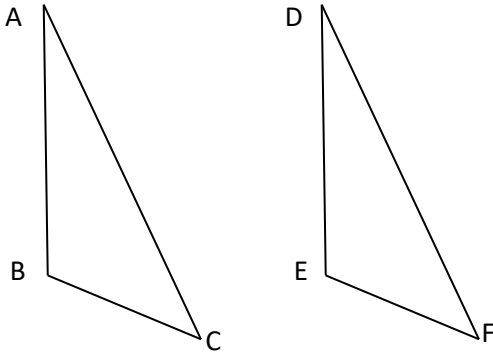


## MATHS WORKSHEETS- GEOMETRY- CONGRUENT TRIANGLES- CONGRUENCE STATEMENT

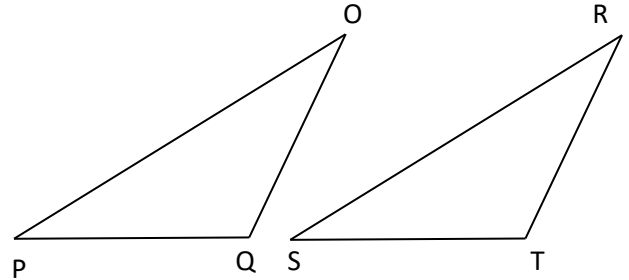
Write the congruence statement for each of the following congruent triangles.

1.



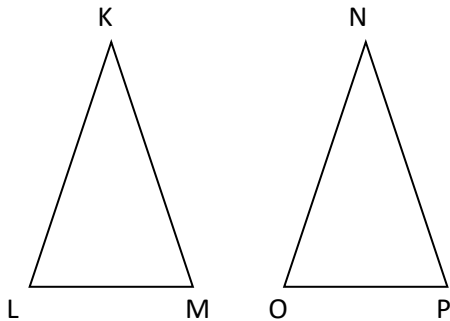
Answer:

2.



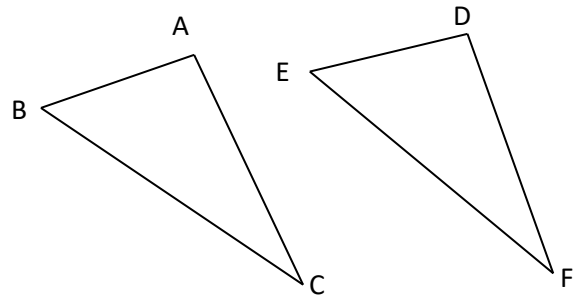
Answer:

3.



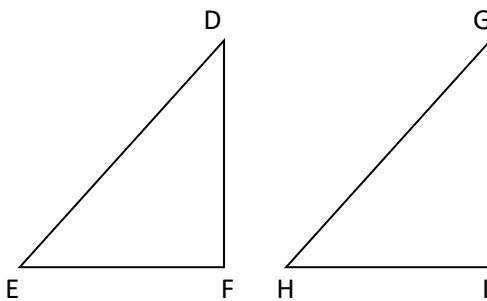
Answer:

4.



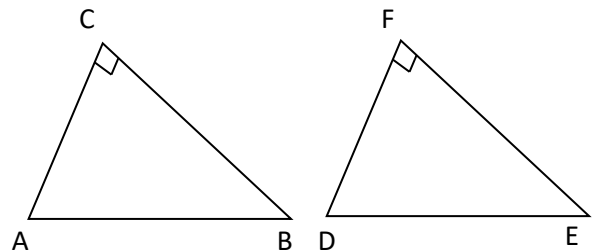
Answer:

5.



Answer:

6.



Answer:

## MATHS WORKSHEETS- GEOMETRY- CONGRUENT TRIANGLES- CONGRUENCE STATEMENT

### Answer Key:

1.  $\triangle ABC \cong \triangle DEF$
2.  $\triangle OPQ \cong \triangle RST$
3.  $\triangle KLM \cong \triangle NOP$
4.  $\triangle ABC \cong \triangle DEF$
5.  $\triangle DEF \cong \triangle GHI$
6.  $\triangle ABC \cong \triangle DEF$