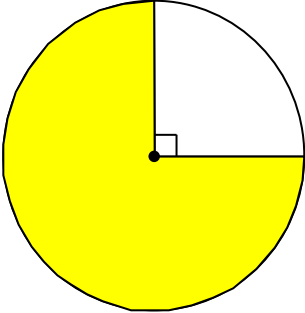
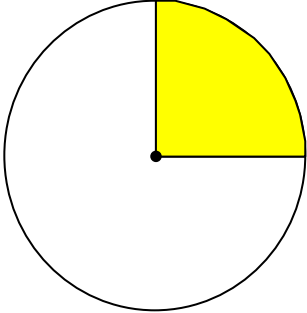
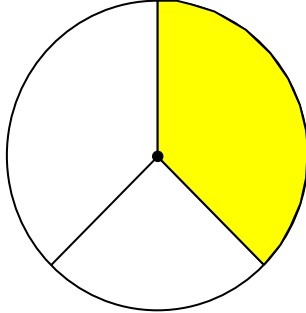
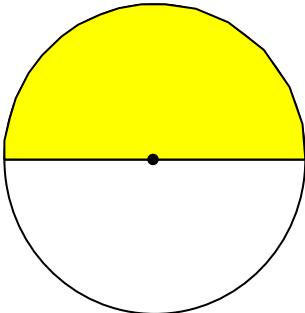
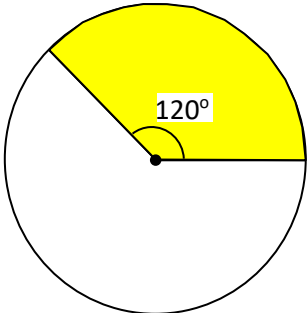
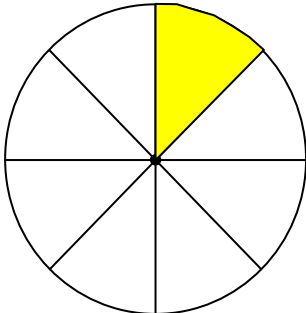
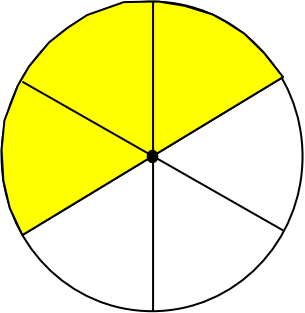
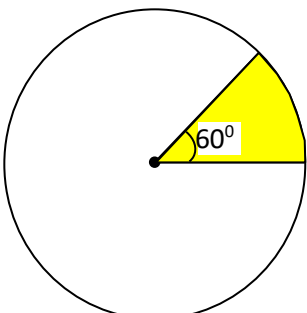
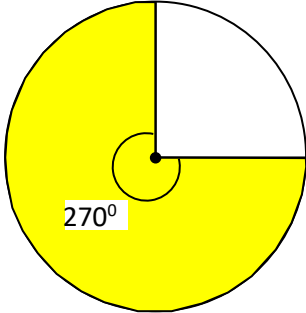


MATHS WORKSHEETS- CIRCLE- FRACTION OF THE CIRCLE

Find the fraction of the following circles.

<p>1.</p>  <p>Answer:</p>	<p>2.</p>  <p>Answer:</p>	<p>3.</p>  <p>Answer:</p>
<p>4.</p>  <p>Answer:</p>	<p>5.</p>  <p>Answer:</p>	<p>6.</p>  <p>Answer:</p>
<p>7.</p>  <p>Answer:</p>	<p>8.</p>  <p>Answer:</p>	<p>9.</p>  <p>Answer:</p>

Answer Key:

1. $\frac{3}{4}$
2. $\frac{1}{4}$
3. $\frac{1}{3}$
4. $\frac{1}{2}$
5. $\frac{120}{360} = \frac{1}{3}$
6. $\frac{1}{8}$
7. $\frac{3}{6} = \frac{1}{2}$
8. $\frac{60}{360} = \frac{1}{6}$
9. $\frac{270}{360} = \frac{3}{4}$