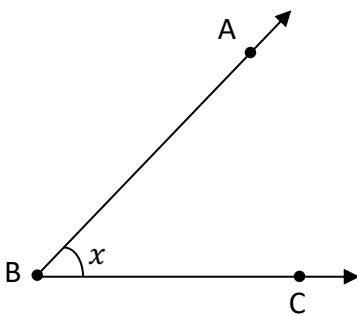


## MATHS WORKSHEETS- GEOMETRY- ANGLES- NAMING ANGLES

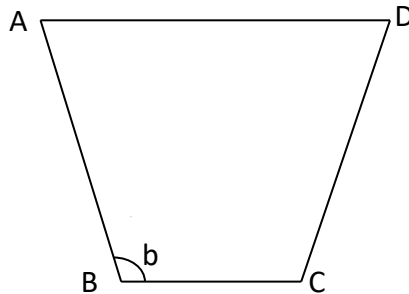
Name each marked angle in three different ways.

1.



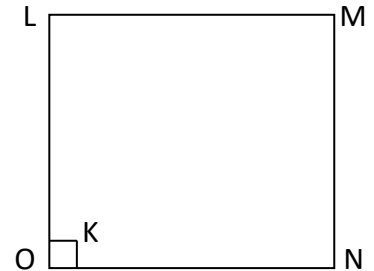
Answer:

2.



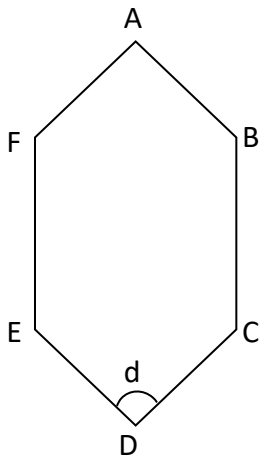
Answer:

3.



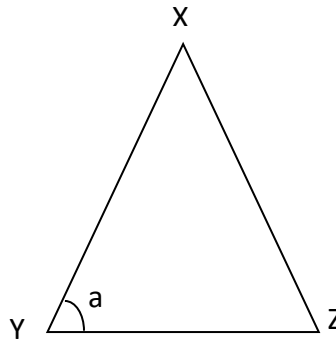
Answer:

4.



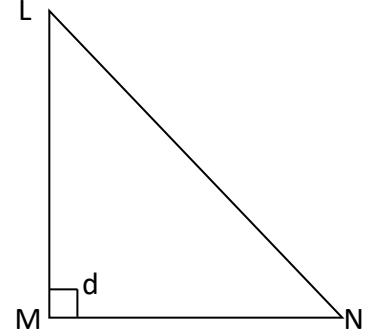
Answer:

5.



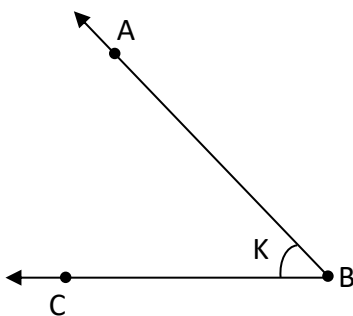
Answer:

6.



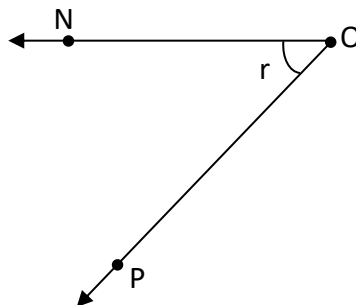
Answer:

7.



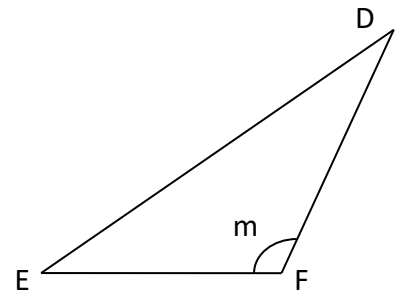
Answer:

8.



Answer:

9.



Answer:

### Answer Key:

1.  $\angle X$ ,  $\angle ABC$ ,  $\angle CBA$
2.  $\angle b$ ,  $\angle ABC$ ,  $\angle CBA$
3.  $\angle k$ ,  $\angle LON$ ,  $\angle NOL$
4.  $\angle d$ ,  $\angle CDE$ ,  $\angle EDC$
5.  $\angle a$ ,  $\angle XYZ$ ,  $\angle ZYX$
6.  $\angle d$ ,  $\angle LMN$ ,  $\angle NML$
7.  $\angle k$ ,  $\angle ABC$ ,  $\angle CBA$
8.  $\angle r$ ,  $\angle NOP$ ,  $\angle PON$
9.  $\angle m$ ,  $\angle DFE$ ,  $\angle EFD$