


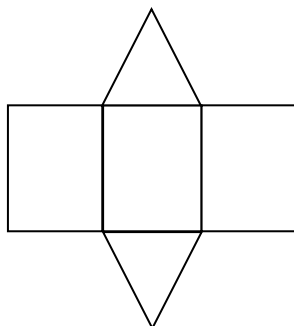
Name the 3D objects that can be made by these nets.

1.



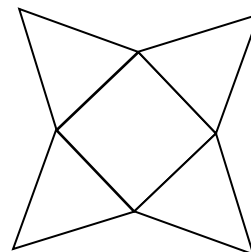
Answer:

2.



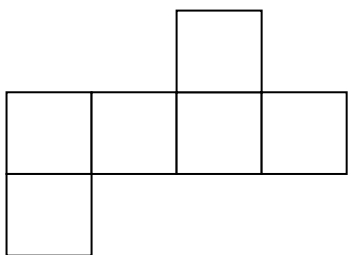
Answer:

3.



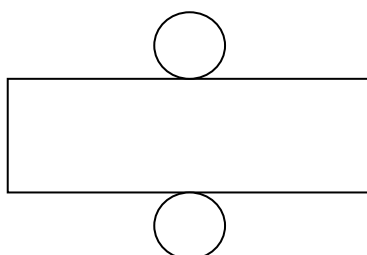
Answer:

4.



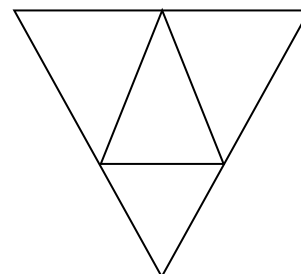
Answer:

5.



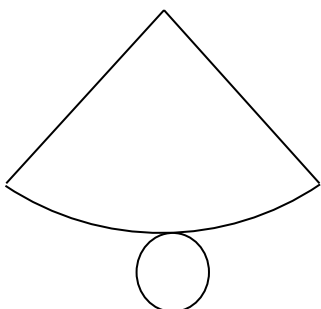
Answer:

6.



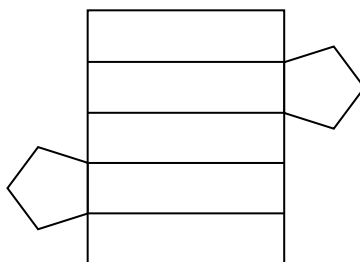
Answer:

7.



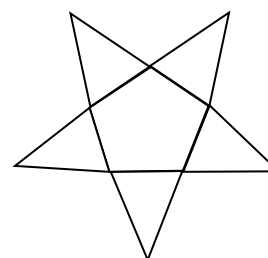
Answer:

8.



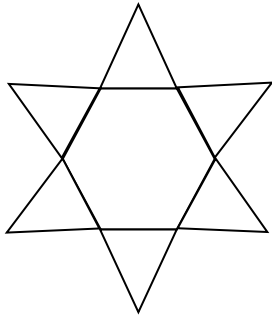
Answer:

9.




Answer:

10.



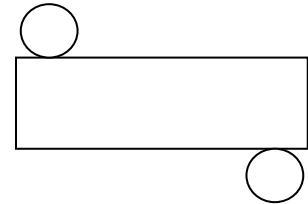
Answer:

11.



Answer:

12.



Answer:

Answer Key:

1. Square prism
2. Triangular prism
3. Square pyramid
4. Cube
5. Cylinder
6. Triangular pyramid
7. Cone
8. Pentagonal prism
9. Pentagonal pyramid
10. Hexagonal pyramid
11. Cube
12. Cylinder