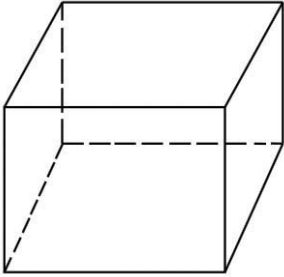


# Brilliance Tuition Centre, Redbank Plains

## MATHS WORKSHEETS – GEOMETRY – 3D SHAPES – NUMBER OF FACES, VERTICES AND EDGES

Identify the shape and write the number of faces, vertices, and edges.

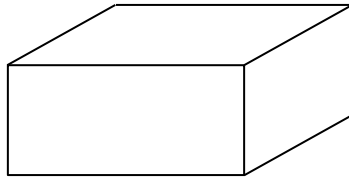
1.



Name:

F:          V:          E:

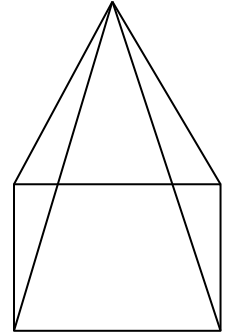
2.



Name:

F:          V:          E:

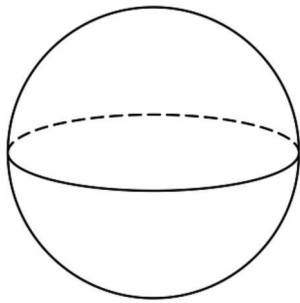
3.



Name:

F:          V:          E:


4.



Name:

F:          V:          E:

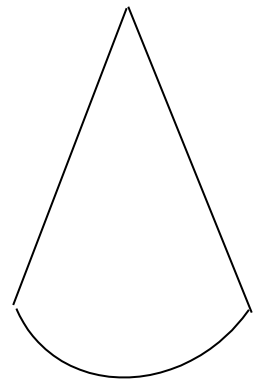
5.



Name:

F:          V:          E:

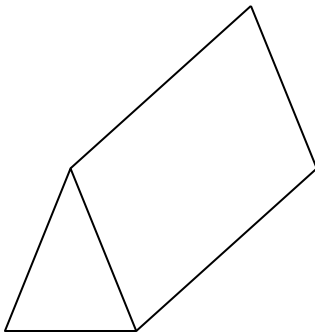
6.



Name:

F:          V:          E:

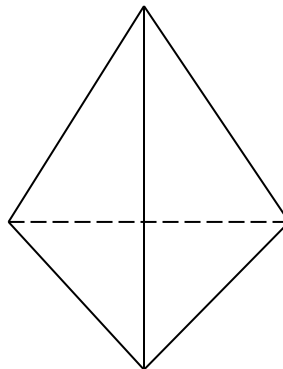
7.



Name:

F:          V:          E:

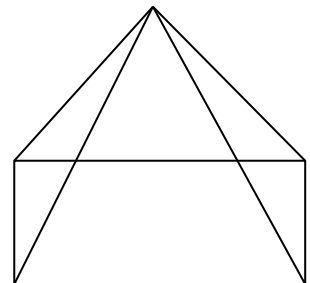
8.



Name:

F:          V:          E:

9.



Name:

F:          V:          E:

## MATHS WORKSHEETS – GEOMETRY – 3D SHAPES – NUMBER OF FACES, VERTICES AND EDGES

### Answer Key:

Name	F	V	E
1. Cube	6	8	12
2. Cuboid	6	8	12
3. Square Pyramid	5	5	8
4. Sphere	1	0	0
5. Cylinder	3	0	2
6. Cone	2	1	1
7. Triangular Prism	5	6	9
8. Triangular Pyramid	4	4	6
9. Rectangular Pyramid	5	5	8