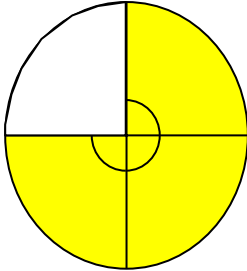


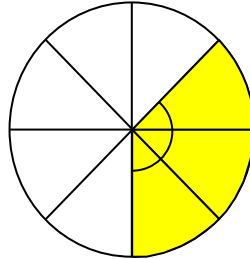
Write the following as angles as a fraction of a turn:

1.



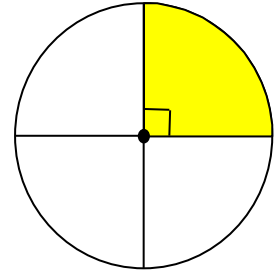
Answer:

2.



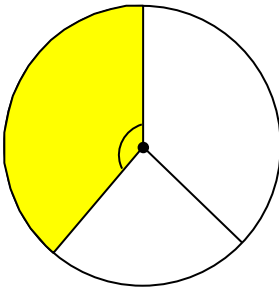
Answer:

3.



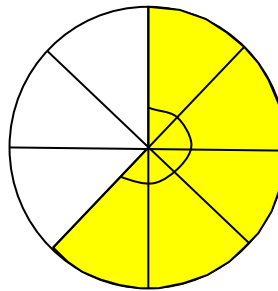
Answer:

4.



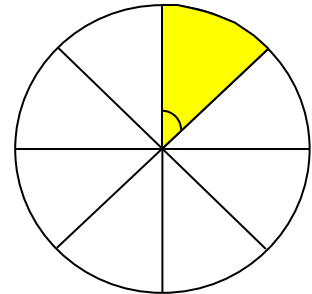
Answer:

5.



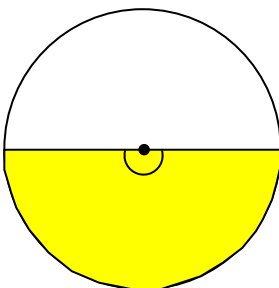
Answer:

6.



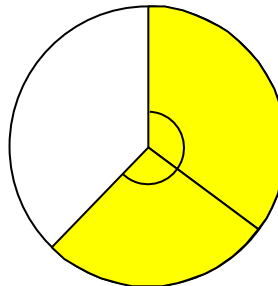
Answer:

7.



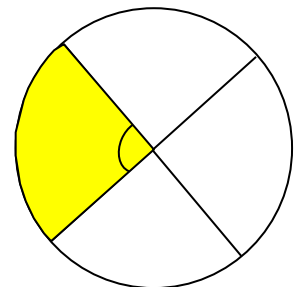
Answer:

8.



Answer:

9.



Answer:

### Answer Key:

1.  $\frac{3}{4}$  of a full turn
2.  $\frac{3}{8}$  of a full turn
3.  $\frac{1}{4}$  of a full turn
4.  $\frac{1}{3}$  of a full turn
5.  $\frac{5}{8}$  of a full turn
6.  $\frac{1}{8}$  of a full turn
7.  $\frac{1}{2}$  of a full turn
8.  $\frac{2}{3}$  of a full turn
9.  $\frac{1}{4}$  of a full turn