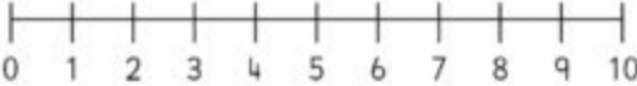
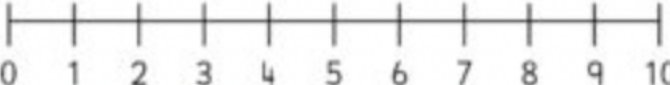
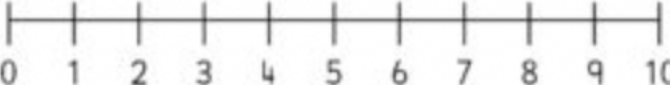
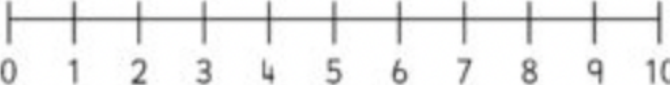
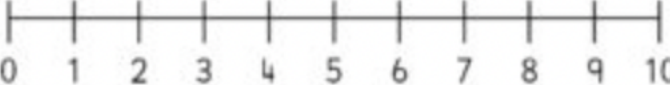
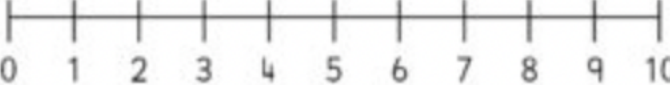
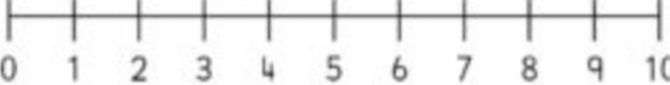
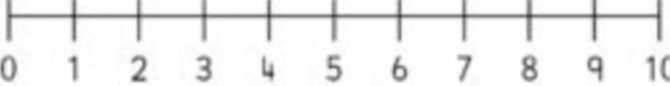
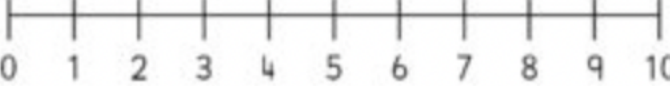
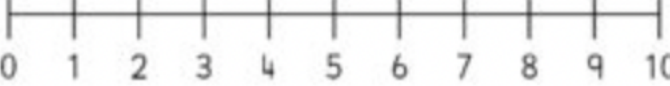


Finish the number sentences. Use the number lines to help with the addition.

- 1       $4 + 3 =$
- 
- 2       $5 + 4 =$
- 
- 3       $3 + 5 =$
- 
- 4       $7 + 3 =$
- 
- 5       $4 + 2 =$
- 
- 6       $7 + 2 =$
- 
- 7       $8 + 1 =$
- 
- 8       $1 + 3 =$
- 
- 9       $3 + 3 =$
- 
- 10      $9 + 1 =$
- 

### Answer Key:

1	7
2	9
3	8
4	10
5	6
6	9
7	9
8	4
9	6
10	10